

SAMPLE PAPER

AG-TMC-TS-TERM-1-00E

MATHEMATICS

(STANDARD)

Time Allowed: 90 Minutes

Maximum Marks: 40

Dr. AGYAT GUPTA MOB : 9425109601

SECTION - A

16 marks

(Section A consists of 20 questions of 1 mark each. Any 16 questions are to be attempted.)

1. The largest number which on dividing 70 and 125 leaves remainders 5 and 8, respectively, is:

(a) 5 (b) 13
(c) 9 (d) 11

2. If $k + 1 = \sec^2 A(1 - \sin A)(1 + \sin A)$, then the value of k is:

(a) 0 (b) 1
(c) 2 (d) 3

3. Find the length of diagonals of a rectangle AOBC whose three vertices are A(0, 3), O(0, 0) and B(5, 0).

(a) $\sqrt{23}$ units (b) 5 units
(c) $\sqrt{21}$ units (d) $\sqrt{34}$ units

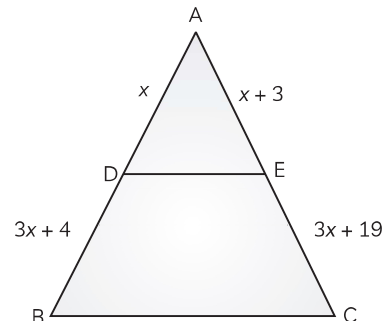
4. A wire, bent in the form of a square, encloses an area of 121 cm^2 . If the same wire is bent in the form of a circle, then the circumference of the circle is:

(a) 11 cm (b) 22 cm
(c) 33 cm (d) 44 cm

5. If the distance between the points A(-3, -14) and B(p, -5) is 9 units, then the value of p is:

(a) 1 (b) -7
(c) -3 (d) 5

6. In the given figure, $DE \parallel BC$. The value of x is:



(a) 2 (b) 4
(c) 7 (d) 11

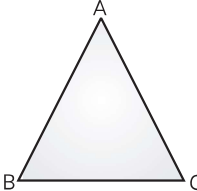
7. What will be the number of the zero(s), if the graph of a quadratic polynomial does not intersect the x -axis?

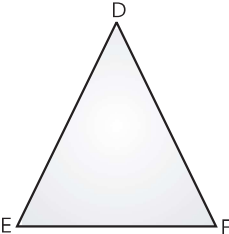
(a) 0 (b) 1
(c) 2 (d) 3

8. On choosing a letter randomly from the letters of the word 'ASSASSINATION', the probability that the letter chosen is a vowel is in the form of $\frac{6}{2x+1}$. Then x is equal to:

(a) 8 (b) 7
(c) 6 (d) 5

9. If the diameter of a wheel is 1.54 m, then the distance covered by it in 100 revolutions is:

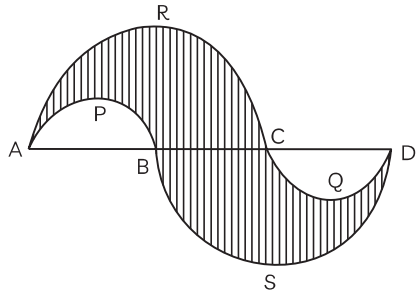
- (a) 143 m (b) 275 m
(c) 484 m (d) 396 cm
- 10.** Two alarm clock ring their alarms at regular intervals of 50 seconds and 48 seconds. If they first beep together at 12 noon, at what time will they beep again?
(a) 12 : 20 p.m.
(b) 01 : 05 p.m.
(c) 02 : 20 p.m.
(d) 12 : 35 p.m.
- 11.** Two dice are thrown together. Then the probability that sum of the two numbers on the dice will be multiple of 4 is:
(a) $\frac{3}{4}$ (b) $\frac{1}{4}$
(c) $\frac{1}{2}$ (d) 0
- 12.** Evaluate the zeroes of the polynomial $2x^2 + 14x + 20$.
(a) -2, -5 (b) 2, 5
(c) -2, 5 (d) -5, 2
- 13.** Given two triangles ABC and DEF. If $\triangle ABC \sim \triangle DEF$, $2AB = DE$ and $BC = 8$ cm, then find the length of EF.
- 

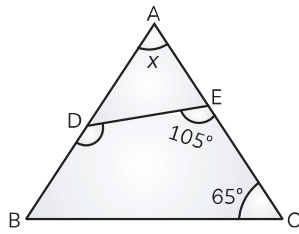

- (a) 10 cm (b) 12 cm
(c) 8 cm (d) 16 cm
- 14.** Find the value of (x, y) , if centroid of the triangle with vertices $(x, 0)$, $(0, y)$ and $(6, 3)$ is $(3, 4)$.
(a) $(3, 0)$ (b) $(6, 6)$
(c) $(3, 9)$ (d) $(-6, 8)$
- 15.** In which quadrant does the mid-point of the line segment joining the points $(-1, 2)$ and $(3, 4)$ lies?
(a) I (b) II
(c) III (d) IV
- 16.** If $\frac{241}{4000} = \frac{241}{2^m \times 5^n}$, then find the value of $m + n$, where m and n are non-negative integers.
(a) 10 (b) 8
(c) 6 (d) 7
- 17.** Evaluate the value of $\frac{1}{\tan A} + \frac{\sin A}{1 + \cos A}$, if $\operatorname{cosec} A = 2$.
(a) 2 (b) 0
(c) 1 (d) -1
- 18.** What is the value of k , if one zero of the polynomial $(k - 1)x^2 - 10x + 3$ is reciprocal of the other?
(a) 4 (b) 5
(c) -1 (d) 0
- 19.** Calculate the value of x , if $\operatorname{LCM}(x, 18) = 36$ and $\operatorname{HCF}(x, 18) = 2$.
(a) 4 (b) 8
(c) 2 (d) 6
- 20.** The value of $\frac{\sin^3 \theta + \cos^3 \theta}{\sin \theta + \cos \theta} + \sin \theta \cos \theta$ is:
(a) $\sin \theta \cos \theta$ (b) $\tan \theta$
(c) $\cot \theta$ (d) 1

SECTION - B

16 marks

(Section B consists of 20 questions of 1 mark each. Any 16 questions are to be attempted.)

- 21.** Rajesh and Mahesh are playing a game. In this game, each player throws two dice and note down the numbers on the dice. By the rules of the game, Mahesh needs to get two numbers such that their product is a perfect square, in order to win the game. What is the probability that Mahesh will win the game?
(a) $\frac{1}{9}$ (b) $\frac{2}{9}$
(c) $\frac{1}{3}$ (d) $\frac{2}{7}$
- 22.** In the given figure, if $AB = BC = CD = 7$ cm, then the perimeter of shaded region is:
- 
- (a) 21 cm (b) 42 cm
(c) 35 cm (d) 66 cm
- 23.** What is the value of x , if $\triangle ADE \sim \triangle ACB$, $\angle DEC = 105^\circ$ and $\angle ECB = 65^\circ$?



- (a) 45° (b) 60°
 (c) 13° (d) 40°

24. Two triangles are similar and their areas are 121 cm^2 and 64 cm^2 respectively. If the median of the first triangle is 12.1 cm , calculate the measure of corresponding median of the other triangle.

- (a) 6.4 cm (b) 8.8 cm
 (c) 9.6 cm (d) 7.6 cm

25. Find the value of $\frac{1}{\alpha} + \frac{1}{\beta}$, if α and β are the zeroes of the polynomial $x^2 + x + 1$.

- (a) 1 (b) 0
 (c) -1 (d) 2

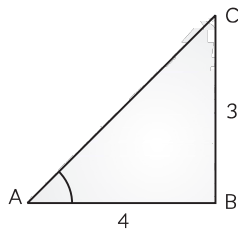
26. On choosing a number x from the numbers 1, 2, 3 and a number y from the numbers 1, 4, 9, the probability of $P(xy < 9)$ is:

- (a) $\frac{5}{9}$ (b) $\frac{1}{9}$
 (c) $\frac{4}{9}$ (d) $\frac{3}{9}$

27. Find the value of n if $a = 2^3 \times 3$, $b = 2 \times 3 \times 5$, $c = 3^n \times 5$ and $\text{LCM}(a, b, c) = 2^3 \times 3^2 \times 5$.

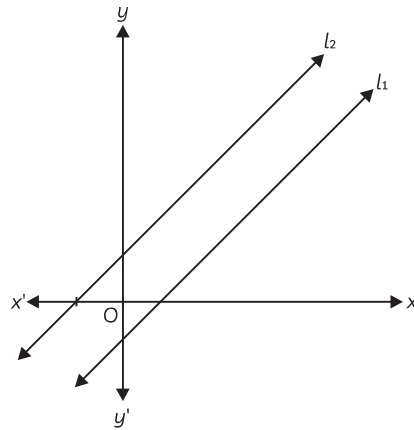
- (a) 1 (b) 2
 (c) 3 (d) 4

28. From the following figure, the value of $\sin A + \sin C \cos C$ is:



- (a) $\frac{12}{5}$ (b) $\frac{24}{25}$
 (c) $\frac{7}{12}$ (d) $\frac{7}{24}$

29. The number of solutions of the pair of linear equations, shown in the graph is:



- (a) Infinite (b) Two
 (c) Unique (d) No solution

30. Consider a $\triangle ABC$, where $DE \parallel BC$. If $DE = \frac{2}{3} BC$ and area of $\triangle ABC = 81 \text{ cm}^2$, then the area of $\triangle DAE$ is:

- (a) 24 cm^2 (b) 16 cm^2
 (c) 36 cm^2 (d) 32 cm^2

31. ABC is an isosceles triangle, which is right angled at B with $AB = 4 \text{ cm}$. What is the length of AC?

- (a) 2 cm (b) $2\sqrt{2} \text{ cm}$
 (c) 4 cm (d) $4\sqrt{2} \text{ cm}$

32. Amit and Prem are very good cricketers and also represented their school team at district and even state levels. One day, after their match, they measured the height of the wickets and found it to be 28 inches. They marked a point P on the ground as shown in the figure below:



If $\cot P = \frac{3}{4}$, the length of PQ is:

- (a) 3 in (b) 7 in
 (c) 21 in (d) 35 in

33. Co-prime numbers is a set of numbers which have 1 as their

- (a) only factor (b) LCM
(c) HCF (d) The two factors
34. If one of the zeroes of the polynomial $f(x) = x^2 - 7x - 8$ is -1 , then find the other zero.
(a) 7 (b) 1
(c) 8 (d) 5
35. An arc of length of length 19 cm of a circle of radius 30 cm, subtends an angle θ at the centre O. The value of θ is:
(a) 30° (b) 37°
(c) 45° (d) 52°
36. Evaluate $\sin^2 \theta - \cos^2 \theta$, if $\sqrt{3} \tan \theta = 3 \sin \theta$, $\theta \neq 0$ and θ is an acute angle.
(a) 1 (b) $\frac{1}{3}$
(c) $-\frac{1}{3}$ (d) -1
37. How many zeroes will be there for the polynomial $f(x) = (x - 2)^2 + 4$?
(a) 0 (b) 1
(c) 2 (d) 3
38. Calculate the minimum number by which $\sqrt{8}$ should be multiplied so as to get a rational number.
(a) $\sqrt{2}$ (b) $\sqrt{3}$
(c) $\sqrt{5}$ (d) $\sqrt{6}$
39. Find the value of x if $\frac{4 - \sin^2 45^\circ}{\cot x \cdot \tan 60^\circ} = 3.5$.
(a) 0° (b) 15°
(c) 30° (d) 60°
40. If $\triangle ABC \sim \triangle PQR$, then evaluate the length of AC, if perimeter of $\triangle ABC = 20$ cm, perimeter of $\triangle PQR = 40$ cm and $PR = 8$ cm.
(a) 4 cm (b) 6 cm
(c) 10 cm (d) 3 cm

SECTION - C (Case Study Based Questions.)

8 marks

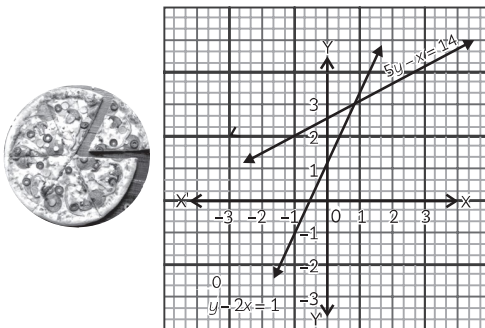
(Section C consists of 10 questions of 1 mark each. Any 8 questions are to be attempted.)

Q. 41-45 are based on Case Study-1

Case Study-1:

Sam went for an outing with his friends. They went to dominos to enjoy the delicious pizza. He was enjoying the pizza with his friends and share with them by slicing it. During slicing the pizza, he noticed that the pair of linear equations formed. (i.e., straight lines)

Let these pair of linear equations be $y - 2x = 1$ and $5y - x = 14$.

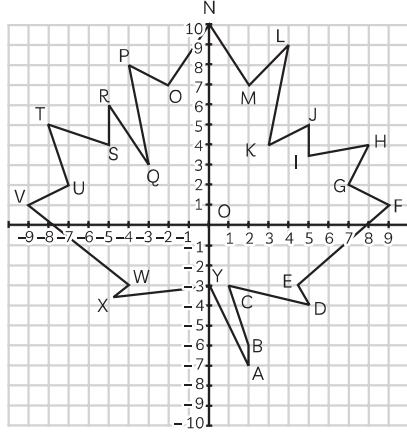


41. What is the point of intersection of the lines represented by the equations $y - 2x = 1$ and $5y - x = 14$?
(a) (1, 3) (b) (6, 4)
(c) (-2, 3) (d) (-4, 2)
42. At what point, does the linear equation $y - 2x = 1$ intersect the y -axis?
(a) (0, 1) (b) $\left(-\frac{1}{2}, 0\right)$
(c) $\left(0, \frac{14}{5}\right)$ (d) (0, -14)
43. The system of linear equations $2x - 3y + 6 = 0$ and $2x + 3y - 18 = 0$:
(a) has infinitely many solutions
(b) has no solution
(c) has a unique solution
(d) May or may not have a solution
44. For what value(s) of k , the system of linear equations $2x - ky + 3 = 0$ and $3x + 2y - 1 = 0$ has no solution?
(a) -6 (b) 6
(c) $\frac{4}{3}$ (d) $-\frac{4}{3}$
45. If a pair of linear equations in two variables is inconsistent, then the lines represented by two equations are:
(a) parallel
(b) intersecting
(c) always coincident
(d) Intersecting or coincident

Q. 46-50 are based on Case Study-2

Case Study-2:

Shyla is a very talented lady. She is always interested in doing something creative in her free time after the household work. She embroidered a leaf by knitting on her table cloth. Her son trace the design on a coordinate plane as shown below.



46. Find the ratio in which C divides the line joining W and E.

- (a) 5 : 4 (b) 5 : 3
(c) 2 : 5 (d) 1 : 1

47. What is the ratio in which x-axis divides the line joining the points P and D?

- (a) 1 : 1 (b) 4 : 5
(c) 2 : 1 (d) 8 : 3

48. What is the ratio in which y-axis divides the line joining the points L and U?

- (a) 1 : 4 (b) 7 : 9
(c) 4 : 7 (d) 9 : 2

49. What is the distance of point K from the origin?

- (a) 3 units (b) 5 units
(c) 7 units (d) 10 units

50. From the given points, the mid-point of which doesn't lie on y-axis?

- (a) U and G (b) P and L
(c) Q and K (d) U and F



TARGET MATHEMATICS CLASSES

