

SAMPLE PAPER

AG-TMC-TS-TERM-1-OOD

MATHEMATICS (STANDARD)

Time Allowed: 90 Minutes

Maximum Marks: 40

Dr. AGYAT GUPTA ; MOB: 9425109601

SECTION - A

16 marks

(Section A consists of 20 questions of 1 mark each. Any 16 questions are to be attempted.)

- A quadratic polynomial with sum and product of zeroes as $-\frac{1}{4}$ and $\frac{1}{4}$, respectively, is:

(a) $4x^2 - x + 1$	(b) $4x^2 + x + 1$
(c) $4x^2 + x - 1$	(d) $4x^2 - x - 1$
- In a $\triangle ABC$ right-angled at B, $AB : AC = 1 : 2$. Then the value of $\frac{\cot A + \tan C}{\sin B + \cos B}$ is:

(a) $\frac{2}{\sqrt{3}}$	(b) $\frac{\sqrt{3} + 1}{2}$
(c) $\frac{2\sqrt{2} - \sqrt{3}}{2}$	(d) $\sqrt{3} - 1$
- The value of $\sin^2 60^\circ + 2 \tan 45^\circ - \cos^2 30^\circ$ is:

(a) 0	(b) 1
(c) 2	(d) $\frac{1}{3}$
- What will be the decimal expansion of the rational number $\frac{27}{1250}$?

(a) 0.0125	(b) 0.0021
(c) 0.0315	(d) 0.0216
- What is the point on y -axis which is equidistant from the points (2, 3) and (-4, 1)?

(a) (0, -1)	(b) (0, 1)
(c) (0, 2)	(d) (0, -2)
- Ramesh draws a card randomly from a deck of 52 cards. The probability that this card bears an even number in black is:

(a) $\frac{1}{13}$	(b) $\frac{1}{52}$
(c) $\frac{2}{13}$	(d) $\frac{5}{26}$
- As shown in the figure, $MN = QP$ and on producing MN and QP , they intersect at R. If $MQ \parallel NP$ and $\angle NMQ = 65^\circ$, calculate $\angle R$.

(a) 30°	(b) 25°
(c) 35°	(d) 50°
- Find a relation between a and b , for which the system of equations $ax + 2y = 7$ and $3x + by = 16$ represents parallel lines.

(a) $a - b = 5$	(b) $a + 2b = 7$
(c) $ab = 6$	(d) $a = 2b$
- Calculate the value of $\alpha^2 - \beta^2$, where α, β are zeroes of the polynomial $x^2 - 5x + 6$.

(a) 0	(b) 2
(c) 7	(d) 5.



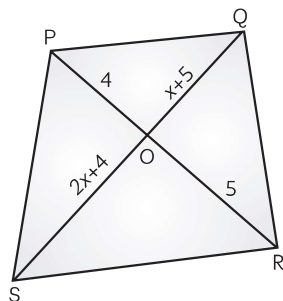
- 10.** A number is selected from the numbers 1, 2 ..., 15. What is the probability that it is a multiple of 4?
 (a) $\frac{7}{15}$ (b) $\frac{2}{5}$
 (c) $\frac{1}{5}$ (d) $\frac{2}{15}$
- 11.** From where does the graph of the equation $x - y = 0$ pass?
 (a) x-axis
 (b) y-axis
 (c) Origin
 (d) Data insufficient
- 12.** What is the value of $\beta - \alpha$, if $\sin \alpha = \frac{\sqrt{3}}{2}$ and $\cos \beta = 0$?
 (a) 0° (b) 30°
 (c) 45° (d) 60°
- 13.** If $(x - 2)$ is a factor of polynomial $p(x) = x^3 + 2x^2 - kx + 10$, then the value of k is:
 (a) 10 (b) 11
 (c) 12 (d) 13
- 14.** A(3, 2) and B(-2, 1) are two vertices of $\triangle ABC$. If $G\left(\frac{5}{3}, -\frac{1}{3}\right)$ is the centroid of $\triangle ABC$, then the coordinates of vertex C are:
 (a) (4, -4) (b) (1, -4)
 (c) (3, 2) (d) (9, 7)
- 15.** What will be the maximum number of students among whom 1001 pens and 910 pencils can be distributed provided that each student gets the same number of pens and pencils?
 (a) 70 (b) 93
 (c) 91 (d) 82
- 16.** Calculate the value of a , if $x = a$ and $y = b$ is the solution of the linear equations $x - y = 2$ and $x + y = 4$.
 (a) 1 (b) 3
 (c) 2 (d) 0
- 17.** Evaluate $\tan \theta$, if $\sin \theta + \cos \theta = \sqrt{2} \cos \theta$, ($\theta \neq 90^\circ$).
 (a) 0 (b) $\sqrt{2}$
 (c) $\sqrt{2} + 1$ (d) $\sqrt{2} - 1$
- 18.** A rational number in its decimal expansion is 1.7321. If the number is expressed in the form of $\frac{p}{q}$, then q must be of the form:
 (a) $2^m 7^n$ (b) $3^m 5^n$
 (c) $2^m 5^n$ (d) $3^m 7^n$
- 19.** What is the value of k in the quadratic polynomial $kx^2 + 4x + 3k$, if the sum of the zeroes is equal to their product?
 (a) $-\frac{4}{3}$ (b) $\frac{2}{3}$
 (c) $\frac{1}{0}$ (d) -5
- 20.** Find the value of k for which the linear equations $x + 2y = 3$ and $5x + ky = 7$, does not have a unique solution.
 (a) 5 (b) 7
 (c) 2 (d) 10

SECTION - B

16 marks

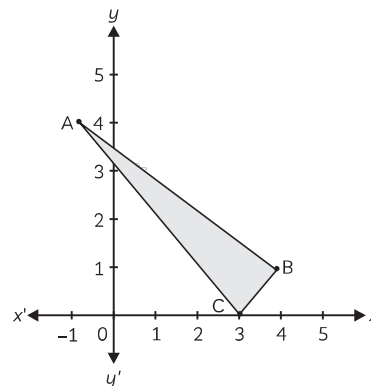
(Section B consists of 20 questions of 1 mark each. Any 16 questions are to be attempted.)

- 21.** In the given figure, PQRS is a trapezium, such that $PQ \parallel SR$. Find x .



- (a) 2 (b) 5
 (c) 3 (d) 4

- 22.** In the given figure, the centroid of $\triangle ABC$ is:



- (a) $\left(3, \frac{5}{2}\right)$ (b) $\left(\frac{5}{2}, 3\right)$
 (c) $\left(2, \frac{5}{3}\right)$ (d) $\left(\frac{5}{3}, 2\right)$

Target Mathematics by- Dr. Agyat Gupta

Resi.: D-79 Vasant Vihar ; Office : 89-Laxmi bai colony

visit us: agyatgupta.com; Ph. : 7000636110(O) Mobile : 9425109601(P)

23. Salesman was having a lot of 100 shirts of which 88 are good, 8 have minor defects and 4 have major defects. Suresh, a shopkeeper will buy only those shirts which are good. If a shirt is selected at random from the lot, what is the probability that he will buy the shirt?

- (a) $\frac{22}{25}$ (b) $\frac{23}{25}$
 (c) $\frac{11}{100}$ (d) $\frac{24}{25}$

24. Consider two numbers as x and y . The sum of them is 33 and their difference is 17. Find the numbers.

- (a) 11 and 22 (b) 25 and 8
 (c) 17 and 26 (d) 24 and 9

25. The number of solutions of the pair of linear equations $x + 3y = 4$ and $2x + y = 5$ is:

- (a) One (b) Infinite
 (c) No Solution (d) Two

26. Write the sum of exponents of prime factors in the prime factorisation of 250.

- (a) 4 (b) 6
 (c) 8 (d) 3

27. Which of the following condition is correct for the graph of a quadratic polynomial $p(x) = ax^2 + bx + c$ to be an upward parabola?

- (a) $a < 0$ (b) $a = 0$
 (c) $a > 0$ (d) $b = 0$

28. Evaluate $0.\overline{68} + 0.\overline{73}$.

- (a) $1.\overline{31}$ (b) $1.\overline{42}$
 (c) $1.\overline{21}$ (d) $1.\overline{01}$

29. Calculate the LCM of two positive integers whose product is 108 and HCF is 3.

- (a) 72 (b) 36
 (c) 18 (d) 9

30. What is the value of θ in the expression, $\tan 3\theta = \sin 45^\circ \cos 45^\circ + \sin 30^\circ$?

- (a) 0° (b) 15°
 (c) 30° (d) 45°

31. What is the value of x if the probability of guessing the correct answer to a certain test question is $\frac{x}{12}$ and the probability of not guessing the correct answer to this question is $\frac{2}{3}$?

- (a) 4 (b) 6
 (c) 5 (d) 3

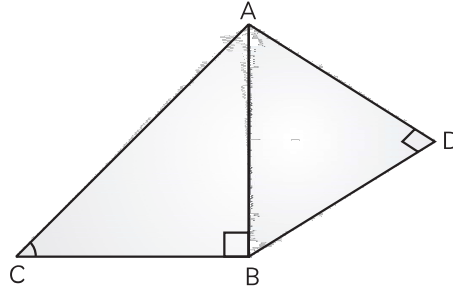
32. The mid-point of $(3p, 4)$ and $(-2, 2q)$ is $(2, 6)$. The value of $(p + q)$ is:

- (a) 5 (b) 6
 (c) 7 (d) 8

33. Degree of a zero polynomial is:

- (a) 0 (b) 1
 (c) 2 (d) Not defined

34. In the given figure, $AD = 4$ cm, $BD = 3$ cm and $CB = 12$ cm. Then $\cot \theta =$




- (a) $\frac{3}{4}$ (b) $\frac{5}{12}$
 (c) $\frac{4}{3}$ (d) $\frac{12}{5}$

35. The value of $(\tan \theta \operatorname{cosec} \theta)^2 - (\sin \theta \sec \theta)^2$ is :

- (a) -1 (b) 0
 (c) 1 (d) 2

36. Priyanka, a X standard student, has only ₹ 1 and ₹ 2 coins in her piggy bank. While counting, she found that total number of coins are 50 and amount of money with her is ₹ 75. Observing that, certain question arises into her mind. She denote the number of ₹ 1 coins by x and ₹ 2 coins by y .



What are the number of ₹ 1 coins in her piggy bank?

- (a) 10 (b) 20
 (c) 22 (d) 25

37. Find the value(s) of x , if the distance between the points $A(x, -1)$ and $B(3, 2)$ is 5.

- (a) 7, -1 (b) 1, 7
 (c) -7, 1 (d) -1, -7

38. In what ratio does x -axis divides the join of $A(2, -3)$ and $B(5, 6)$?

- (a) 1 : 1 (b) 2 : 1
(c) 1 : 2 (d) 1 : 3

39. Calculate the least positive integer which is divisible by 20 and 24.

- (a) 120 (b) 200
(c) 150 (d) 480

40. Which among the following is the relation between x and y such that the point (x, y) is equidistant from $(7, 1)$ and $(3, 5)$?

- (a) $x - y = 2$
(b) $3x + 2y = 6$
(c) $7x - 8y = 0$
(d) $3x - 2y = 4$

SECTION - C (Case Study Based Questions.)

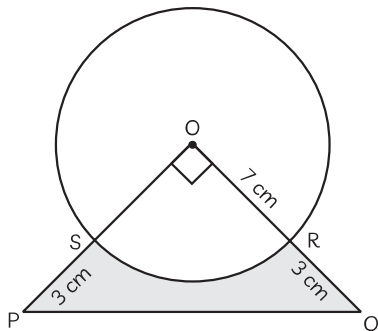
8 marks

(Section C consists of 10 questions of 1 mark each. Any 8 questions are to be attempted.)

Q. 41-45 are based on Case Study-1

Case Study-1:

St. Francis is organising their annual fest. They want to give cash prize along with a memento to their best students. Four identical memento are made by the school to award students for four values i.e. Honesty, Punctuality, Cleanliness and Non-violence. Each memento is made as shown in figure and its base PQRS is shown from the front side. The part PQRS is silver plated. The rate of silver plating is ₹20 per m^2 .



41. What is the area of quadrant OSRO?

- (a) 36.5 cm^2 (b) 38.5 cm^2
(c) 39 cm^2 (d) 40 cm^2

42. Evaluate the area of ΔPOQ .

- (a) 36 cm^2 (b) 48 cm^2
(c) 50 cm^2 (d) 52 cm^2

43. What is the total cost of silver plating the part PQRS?

- (a) ₹ 200 (b) ₹ 230
(c) ₹ 280 (d) ₹ 420

44. Calculate the area of major sector in the figure.

- (a) 112 cm^2 (b) 114 cm^2
(c) 100 cm^2 (d) 115.5 cm^2


45. What is the length of arc SR?

- (a) 10 cm (b) 11 cm
(c) 12 cm (d) 14 cm

Q. 46-50 are based on Case Study 2

Case Study-2 :

Rajesh has a field which is in the shape of a right angled triangle. The perpendicular and the base are of lengths 144 m and 84 m respectively. He wants to leave a space in the form of a square of largest size inside the field for growing wheat and the remaining for growing vegetables.



46. Which among the following is the incorrect criterion of similarity?

- (a) ASA (b) SSS
(c) SAS (d) AAA

47. If a line is drawn parallel to one side of a triangle to intersect the other two sides in distinct points, then other two sides are divided in the same ratio. Identify the theorem.

- (a) Bisector theorem
(b) Pythagoras theorem
(c) Thales theorem
(d) Alternate segment theorem



48. What is the length of the side of squared space?
- (a) 55.2 m
 - (b) 53.05 m
 - (c) 54 m
 - (d) 52.05 m

49. What is the area of the square field?
- (a) 2850.70 m^2
 - (b) 2820.40 m^2
 - (c) 2930 m^2
 - (d) 2814.30 m^2
50. Evaluate the area of the remaining field, other than the square field?
- (a) 3232.5 m^2
 - (b) 3645 m^2
 - (c) 3250 m^2
 - (d) 3233.7 m^2



TARGET MATHEMATICS

The Excellence Key...

by

Dr. AGYAT GUPTA

(M.Sc, B.Ed., M.Phill, P.hd)



the tradition of success

year after year...

Congratulation...

Download the APP "AGYAT GUPTA"

Available on the iPhone
App Store

GET IT ON
Google Play

for ONLINE CLASSES

CLASS-XII



for
outstanding performance in
EXAM (2020-21)

**MOHNISH
KHAN**

MATHS: 100/100

CLASS-XII



for
outstanding performance in
CBSE BOARD
EXAM (2019-20)

**NIKITA
CHAURASIA**

MATHS: 100/100

100 % "ACHIEVEMENT by TARGETIANS"

