



PRAGATHI...THE SCHOOL

Dakshina Bharatha Mahila Samaja Premises,
Whitefield Railway Station Road, Kadugodi, Bangalore - 560067

GRADE X

Mathematics

Date : 16/11/2022

Time Allowed: 1 Hrs

UNIT TEST

Max Marks: 30

General Instructions :

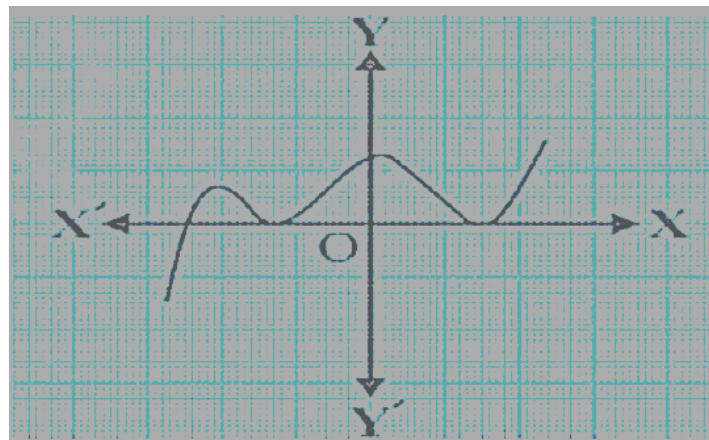
1. This Question paper contains - **five sections** A, B, C, D and E. Each section is compulsory. However, there are internal choices in some questions.
2. **Section A** has 3 **MCQ's** and **01** Assertion-Reason based questions of 1 mark each.
3. **Section B** has 3 **Very Short Answer (VSA)-type** questions of 2 marks each.
4. **Section C** has 2 **Short Answer (SA)-type** questions of 3 marks each.
5. **Section D** has 2 **Very Long Answer (VLA)-type** questions of 5 marks each.
6. **Section E** has 1 **Long Answer (LA)-type** question of 4 marks each.

SECTION A

(Multiple Choice Questions)

Each question carries 1 mark

1. If one zero of the quadratic polynomial $x^2 + 3x + k$ is 2, then the value of k is
a) 10 b) -10 c) 5 d) -5
2. If 2 and $1/2$ are the zeros of $px^2 + 5x + r$, then
a) $P = r = 2$ b) $p = r = -2$ c) $p = 2, r = -2$ d) $p = -2, r = 2$
3. How many zeros are there for the given polynomial?



- a) 0 b) 1 c) 2 d) 3

ASSERTION-REASON BASED QUESTIONS

In the following questions, a statement of assertion (A) is followed by a statement of

Reason (R). Choose the correct answer out of the following choices.

- (a) Both A and R are true and R is the correct explanation of (A)
- (b) Both A and R are true but R is not the correct explanation of (A)
- (c) A is true but R is false.
- (d) A is false but R is true.

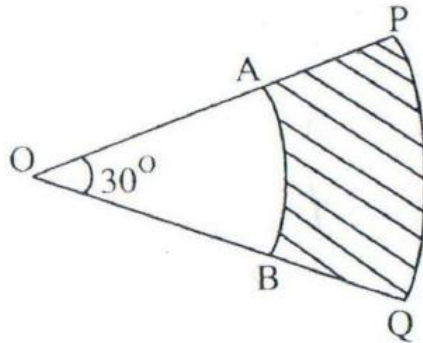
4. **Assertion (A):** In a circle of radius 6 cm, the angle of a sector is 60° . Then the area of the sector is $132/7 \text{ cm}^2$

Reason (R): Area of the circle with radius r is πr^2 .

SECTION B

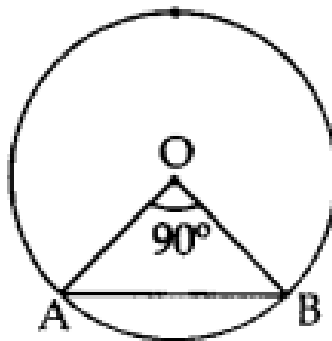
This section comprises of very short answer type-questions (VSA) of 2 marks each

- 5. Find a quadratic polynomial with the given numbers are the sum and product of its zeros respectively $-1/4$, $1/4$
- 6. The circumference of a circle is 22 cm. Calculate the area of its quadrant (in cm^2).
- 7. In the Figure, PQ and AB are respectively the arcs of two concentric circles of a radii 7 cm and 3.5 cm and centre O. If $\angle POQ = 30^\circ$, then find the area of the shaded region.



OR

Find the area of the major segment APB, in the figure of a circle of radius 35 cm and $\angle AOB = 90^\circ$. (Use $\pi = 22/7$)



SECTION C


(This section comprises of short answer type questions (SA) of 3 marks each)

8. Write the zeros of the quadratic polynomial $f(x) = 4\sqrt{3}x^2 + 5x - 2\sqrt{3}$

OR

Find the zeros of the $8x^2 - 4$ and verify the relationship between the zeros and the coefficients.

9. An umbrella has 8 ribs which are equally spaced . Assuming umbrella to be a flat circle of radius 45 cm, find the area between the two consecutive ribs of the umbrella.



SECTION D

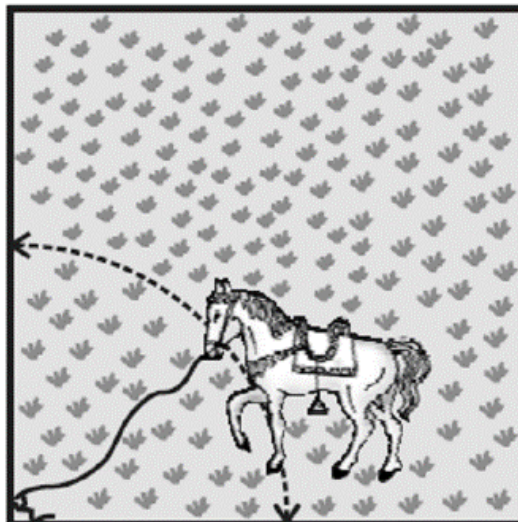
(This section comprises of very long answer-type questions (VLA) of 5 marks each)

10. A horse is tied to a peg at one corner of a square shaped grass field of side 15 m by means of a 5 m long rope .

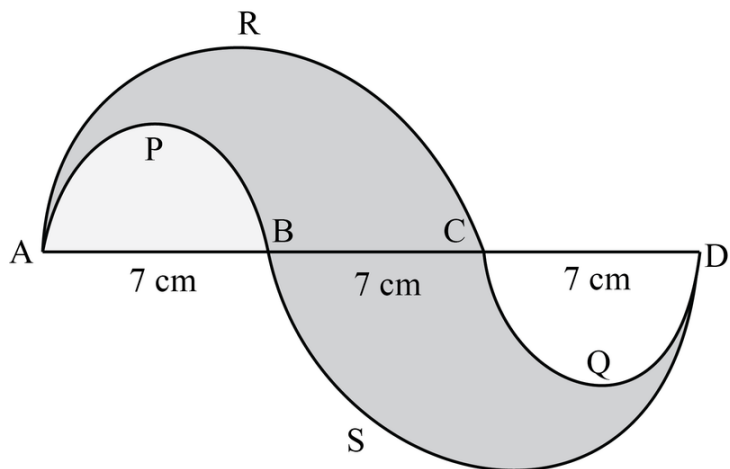
Find (i) the area of that part of the field in which the horse can graze.

(ii) the increase in the grazing area if the rope were 10 m long instead of 5 m.

(Use $\pi = 3.14$)

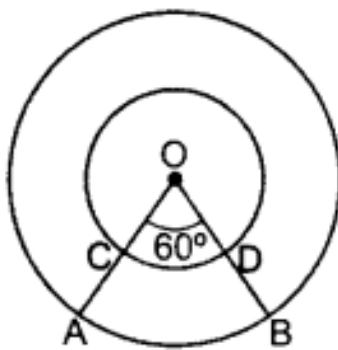


11. In the given fig, APB and CQD are semi circles of diameter 7 cm each, while ARC and BSD are semicircles of diameter 14 cm each. Find the perimeter of the shaded region. (Use $\pi = 22/7$)



OR

In Figure, two concentric circles with centre O, have radii 21 cm and 42 cm. If $\angle AOB = 60^\circ$, find the area of the shaded region. [Use $\pi = 22/7$]



SECTION E

(This section comprises of long answer-type questions (LA) of 4 marks each)

12. Find the area of the segment AYB shown in Fig. , if radius of the circle is 21 cm and $\angle AOB = 120^\circ$. (Use $\pi = 22/7$)

